

Music

Pitch names – treble clef

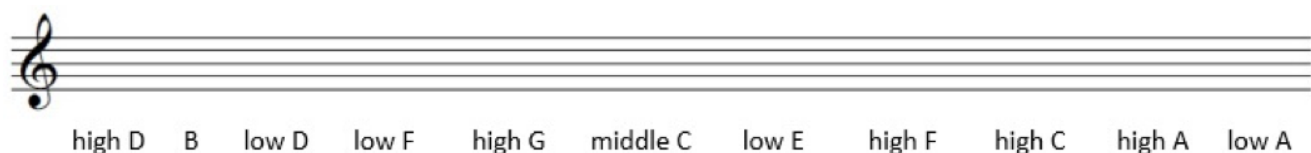
Pitch names – treble clef

Write the treble clef pitch names under the following notes. The top line can be used for reference.



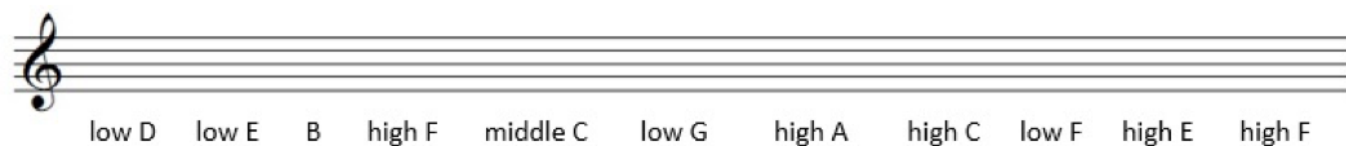
Four staves of musical notation in treble clef. The first staff shows a sequence of notes on a five-line staff with pitch names C, D, E, F, G, A, B, C, D, E, F, G, A written below. The second staff contains a sequence of notes with stems pointing up or down. The third and fourth staves also contain sequences of notes with stems pointing up or down.

Draw the following treble clef pitches as semibreves.




A single treble clef staff with ten blank lines. Below the staff, the following pitch names are listed: high D, B, low D, low F, high G, middle C, low E, high F, high C, high A, low A.

Draw the following treble clef pitches as crotchets. Notes below B have a stem that goes *up* on the *right*. Notes above B have a stem that goes *down* on the *left*. The stem for B can go up or down.



A single treble clef staff with ten blank lines. Below the staff, the following pitch names are listed: low D, low E, B, high F, middle C, low G, high A, high C, low F, high E, high F.

Draw the notes of the C Major scale ascending (going up) as minims.



A single treble clef staff with ten blank lines.